




# Numbers



0119CH11



Write the number.

Draw the bundles of tens and ones of the number.

3 bundles of 10 sticks and 4 individual sticks.

TENS	ONES	
3	4	

4 bundles of 10 sticks and 7 individual sticks.

TENS	ONES	

2 bundles of 10 sticks.

TENS	ONES	

Blank drawing area for the number 43.

TENS	ONES	
4	3	

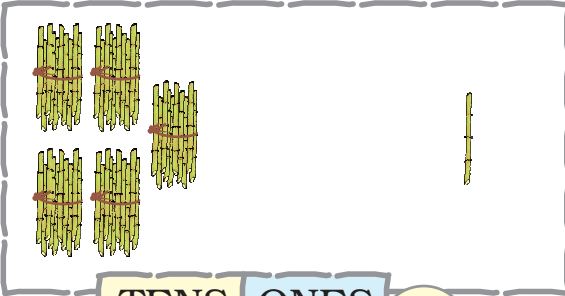
Blank drawing area for the number 22.

TENS	ONES	
2	2	

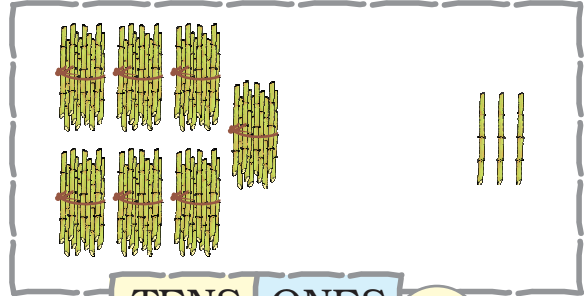




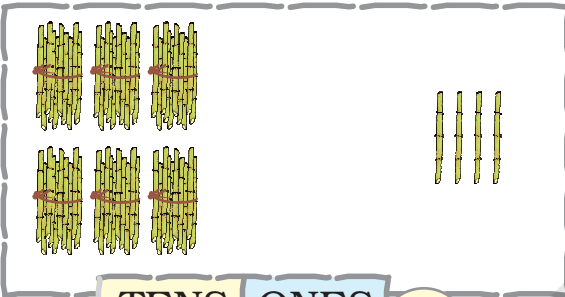
Write the number in the given space.



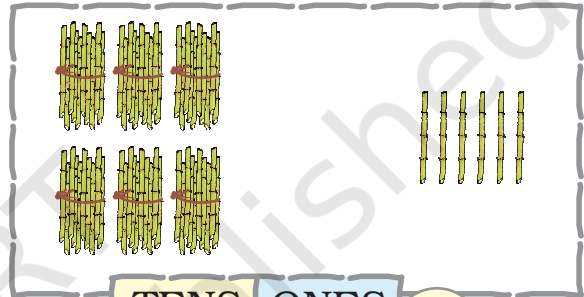
TENS	ONES	



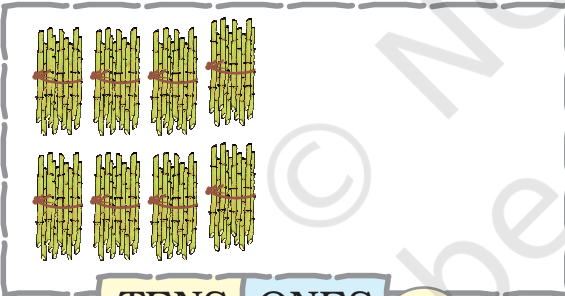
TENS	ONES	



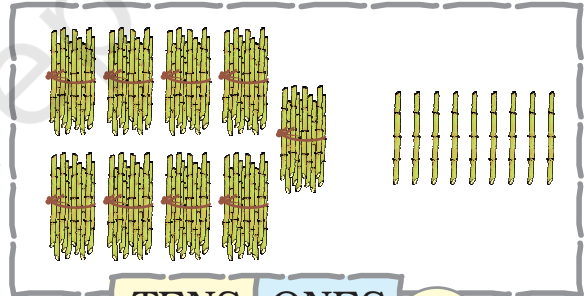
TENS	ONES	



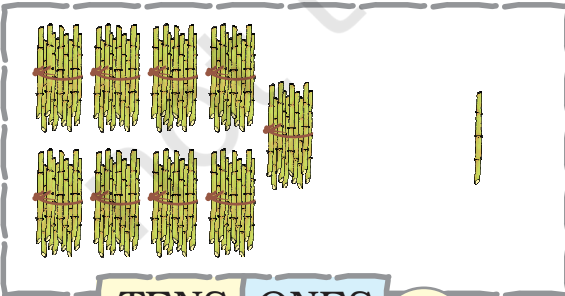
TENS	ONES	



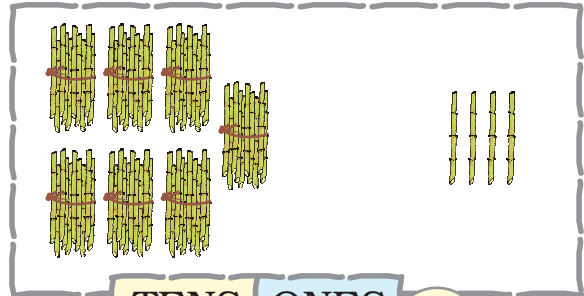
TENS	ONES	



TENS	ONES	



TENS	ONES	



TENS	ONES	



# Numbers from 51 to 70

Fill in the blanks.

5 TENS      1 ONE      51

5 TENS      2 ONES      52

5 TENS      3 ONES      53

5 TENS      4 ONES      54

5 TENS      5 ONES      55

5 TENS      6 ONES      56

5 TENS      7 ONES      57

5 TENS      8 ONES      58

5 TENS      9 ONES      59

5 TENS      1 TEN      60

6 TENS      1 ONE      61

6 TENS      2 ONES      62

6 TENS      3 ONES      63

6 TENS      4 ONES      64

6 TENS      5 ONES      65

6 TENS      6 ONES      66

6 TENS      7 ONES      67

6 TENS      8 ONES      68

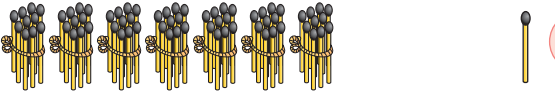
6 TENS      9 ONES      69

6 TENS      1 TEN      70



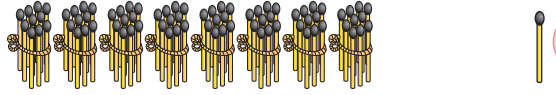
# Numbers from 71 to 90

Fill in the blanks.


71


7 TENS

1 ONE


81

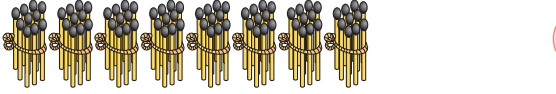
8 TENS

1 ONE



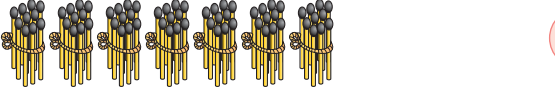
7 TENS

2 ONES


82

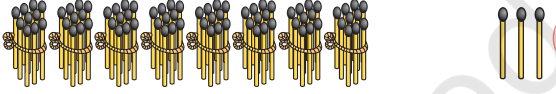
8 TENS

2 ONES


73

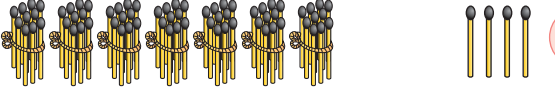
7 TENS

3 ONES



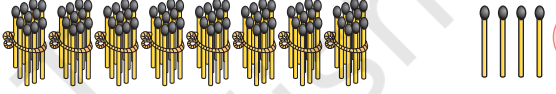
8 TENS

3 ONES


74

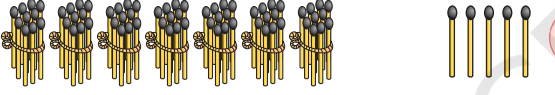
7 TENS

4 ONES



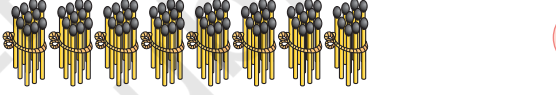
8 TENS

4 ONES



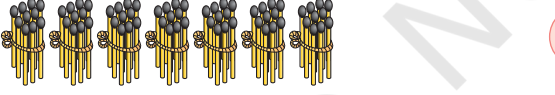
7 TENS

5 ONES


85

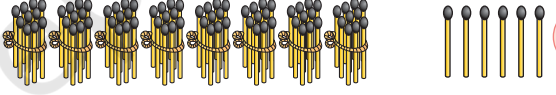
8 TENS

5 ONES


76

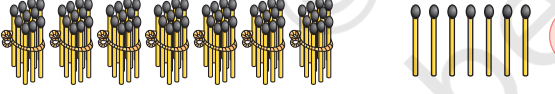
7 TENS

6 ONES


86

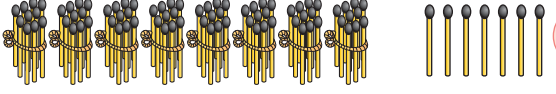
8 TENS

6 ONES



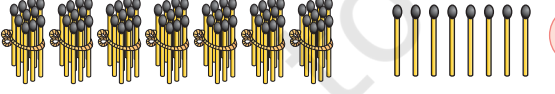
7 TENS

7 ONES



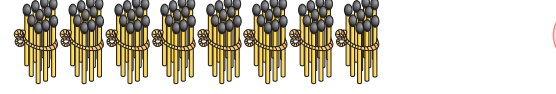
8 TENS

7 ONES




7 TENS

8 ONES


88

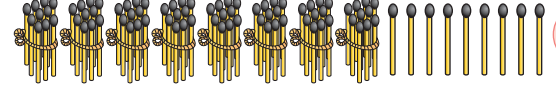
8 TENS

8 ONES


79

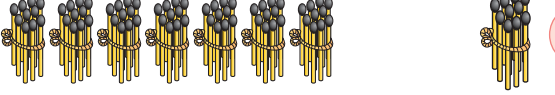
7 TENS

9 ONES


89

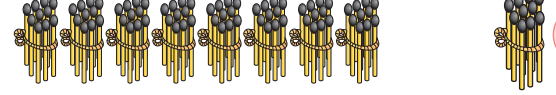
8 TENS

9 ONES


80

7 TENS

1 TEN


90

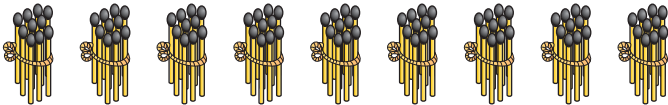

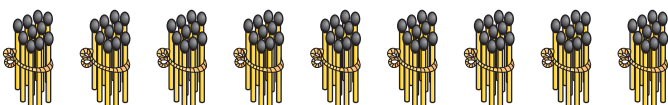
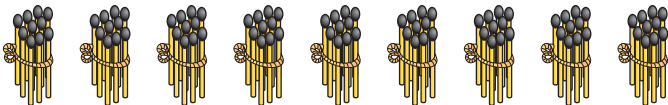

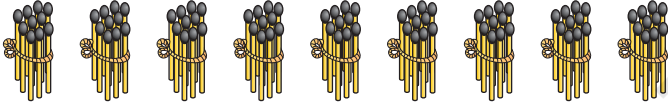
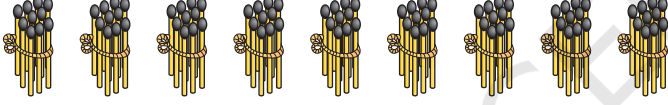

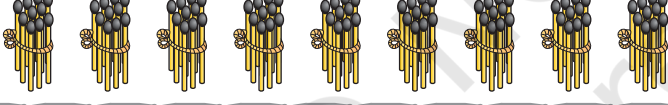


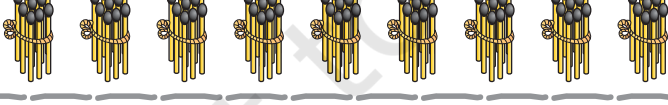
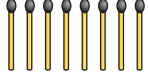




8 TENS

1 TEN



# Numbers from 91 to 100

Fill in the blanks.

		91
9 TENS	1 ONE	
		92
9 TENS	2 ONES	
		93
9 TENS	3 ONES	
		94
9 TENS	4 ONES	
		95
9 TENS	5 ONES	
		96
9 TENS	6 ONES	
		
9 TENS	7 ONES	
		
9 TENS	8 ONES	
		
9 TENS	9 ONES	
		100
9 TENS	1 TEN	





Write the missing numbers.

51	52	53	54	55	56	57	58	59	60
	62			65				69	
		73							80
			84				88		
		93		95				99	



Let us play the game of snakes and ladders.

